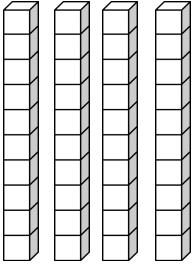
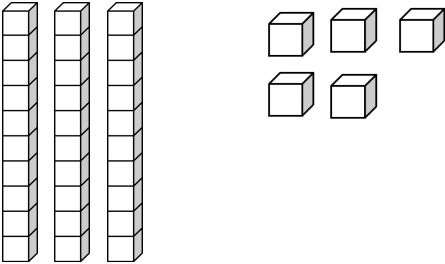
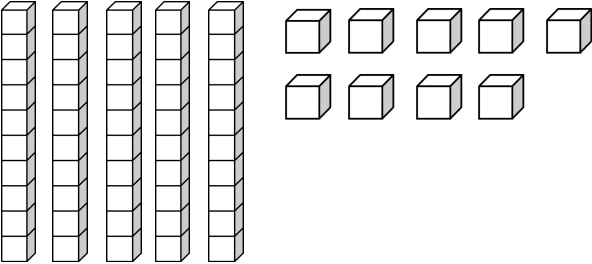
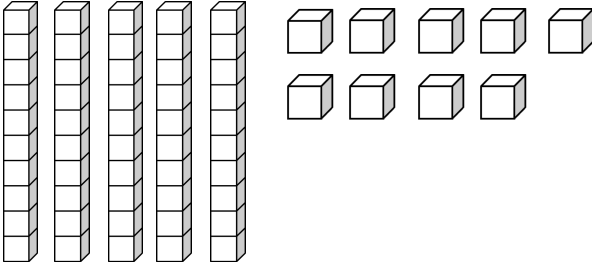


Math Homework # 28 Place Value

<p>1. Tell how many tens and ones. Write the number.</p>  <p>_____ tens + _____ ones = _____</p>	<p>2. Tell how many tens and ones. Write the number.</p>  <p>_____ tens + _____ ones = _____</p>
<p>3.</p> <p>63 = _____ tens _____ ones</p>	<p>4.</p> <p>29 = _____ tens _____ ones</p>
<p>5.</p> <p>5 tens 7 ones = _____</p>	<p>6.</p> <p>1 tens 4 ones = _____</p>
<p>7.</p> <p>10 + 8 = _____</p>	<p>8.</p> <p>50 + 6 = _____</p>
<p>9. Color in 42. Fill in the blanks.</p>  <p>_____ tens _____ ones</p> <p>_____ + _____ = _____</p>	<p>10. Color in 38. Fill in the blanks.</p>  <p>_____ tens _____ ones</p> <p>_____ + _____ = _____</p>

11.

$$18 - 8 = \underline{\hspace{2cm}}$$

12.

$$12 + 7 = \underline{\hspace{2cm}}$$

13. Lee bought 9 toys and 8 pieces of candy at the store. How many things did Lee buy at the store in all?

Show your work by drawing a picture and writing a number sentence.

 ○ ○

14. I planted 18 flowers. Seven of the flowers have sprouted. How many more flowers am I waiting on to sprout?

Show your work by drawing a picture and writing a number sentence.

 ○ ○